







Fíjate en las siguientes operaciones y resuélvelas siguiendo las indicaciones de colores.

 $+$  $-$  $=$ 

4

 $+$  $+$  $=$

 $-$  $-$  $=$

 $+$  $-$

 $-$  $=$